

Name: \_\_\_\_\_

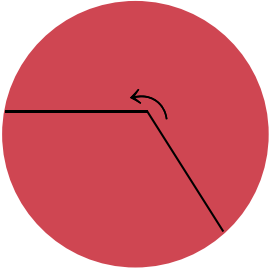
Class: \_\_\_\_\_

Date: \_\_\_\_\_

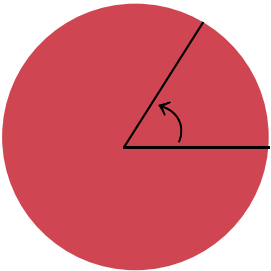
Subject: \_\_\_\_\_

# Geometry Worksheet

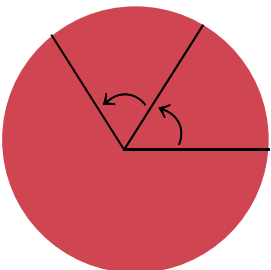
Connect the following angles with the correct names




**Right angle**



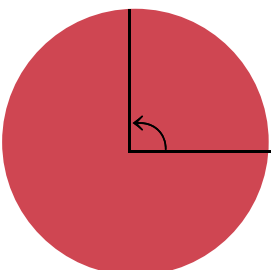
**Straight line**



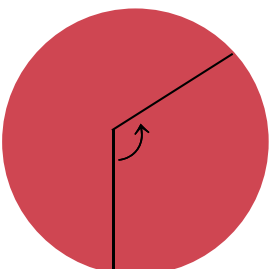
**Obtuse angle**



**Acute angle**



**Reflex angle**



**Adjacent angles**